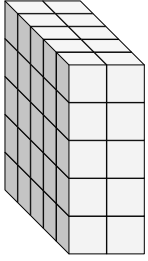


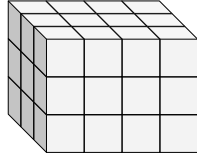


Find the length, width and height of the rectangular prism. Then find the volume.

Ex)



1)



Answers

Ex. 5 2 5 50

1. _____

2. _____

3. _____

4. _____

5. _____

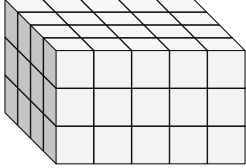
6. _____

7. _____

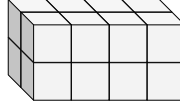
8. _____

9. _____

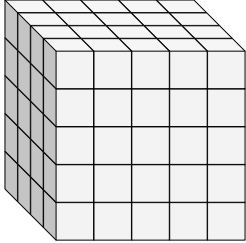
2)



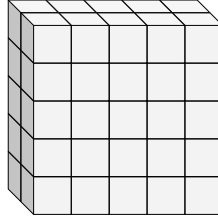
3)



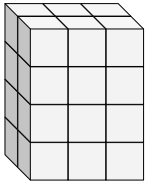
4)



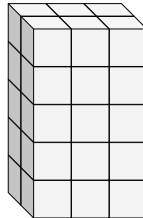
5)



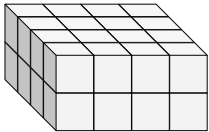
6)



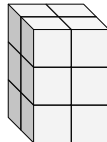
7)



8)

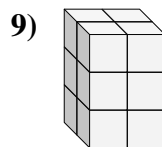
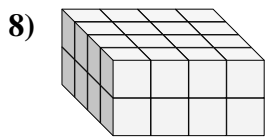
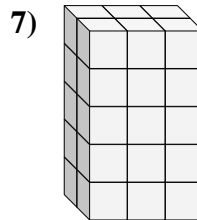
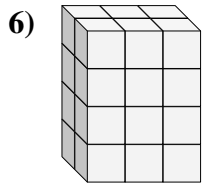
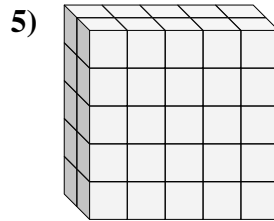
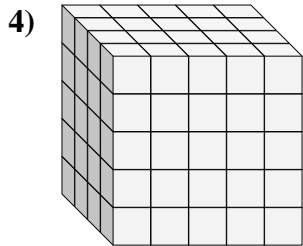
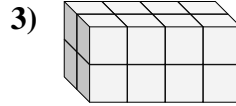
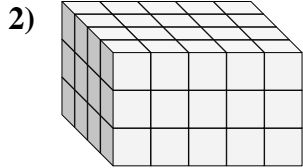
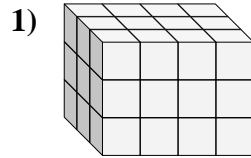
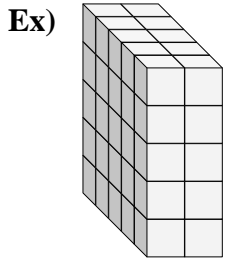


9)





Find the length, width and height of the rectangular prism. Then find the volume.



Answers

Ex. 5 2 5 50

1. 3 4 3 36

2. 4 5 3 60

3. 2 4 2 16

4. 4 5 5 100

5. 2 5 5 50

6. 2 3 4 24

7. 2 3 5 30

8. 4 4 2 32

9. 2 2 3 12